

1 What it is like outside is the _____.

- A air
- B weather
- C wind
- D wind vane

2 Wind is moving _____.

- A air
- B weather
- C wind
- D wind vane

3 A _____ is a weather tool.

- A air
- B weather
- C wind
- D wind vane

4 A wind vane points to where the _____ is coming from.

- A water
- B weather
- C wind
- D wind vane

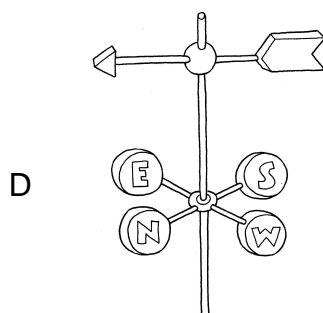

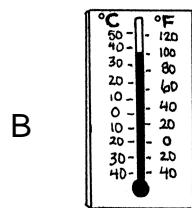
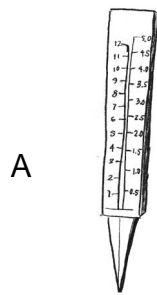
5 What is wind?

- A falling water
- B a large cloud
- C moving air
- D light from the Sun

6 What does a wind vane show?

- A the direction wind is coming from
- B temperature of the air
- C how much rain has fallen
- D the direction rain falls

7 Look at the pictures. Which tool shows which way the wind blows from?



- 8 The _____ is how hot or cold it is.
- A measure
 - B red line
 - C temperature
 - D thermometer
- 9 You can _____ temperature.
- A measure
 - B red line
 - C temperature
 - D thermometer
- 10 A tool that measures temperature is a _____.
- A measure
 - B red line
 - C temperature
 - D thermometer
- 11 The _____ on a thermometer shows the temperature.
- A measure
 - B red line
 - C temperature
 - D thermometer
- 12 The red line on a thermometer is low. Which word describes the weather?
- A rainy
 - B warm
 - C windy
 - D cold



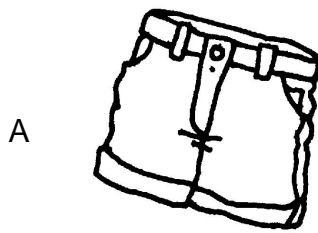
13 What does the word temperature mean?

- A how wet or dry it is
- B how windy or calm it is
- C how hot or cold it is
- D how sunny or cloudy it is

14 What does a thermometer measure?

- A how warm the air is
- B how much rain has fallen
- C how fast the wind is moving
- D how sunny the sky is

15 Look at the pictures. Which of these should you wear when the temperature is low?



16 Rain falls from _____.

- A clouds
- B numbers
- C rain gauge
- D water

17 Rain falls as drops of _____.

- A clouds
- B numbers
- C rain gauge
- D water

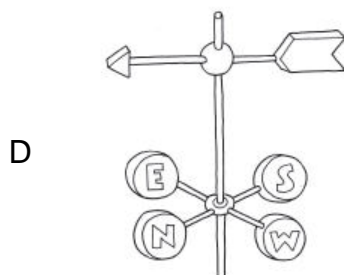
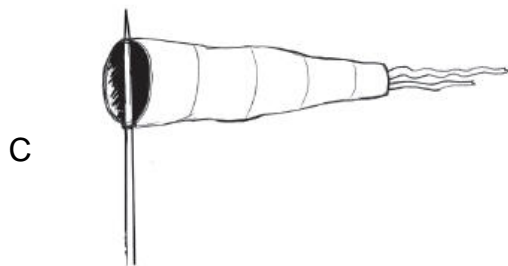
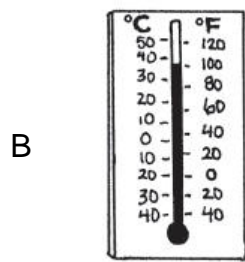

18 A tool used to measure rain is a _____.

- A clouds
- B numbers
- C rain gauge
- D water

19 The _____ on a rain gauge show how much rain falls.

- A clouds
- B numbers
- C rain gauge
- D water

20 Which tool measures how much rain has fallen?



21 What does rain and snow fall from?

- A stars
- B the Sun
- C clouds
- D the Moon

22 A rain gauge was put outside in the morning. In the evening, the rain gauge was still empty. What does this show?

- A No rain fell during the day.
- B It rained a little in the morning.
- C It will rain during the night.
- D A lot of rain fell during the day.

23 Look at this picture.



What does this picture show?

- A a rain storm
- B a snow storm
- C a wind storm
- D a sand storm

24 Light from the _____ causes weather.

- A air
- B cloudy
- C Sun
- D water

- 25 The Sun warms the land and the _____.
- A air
 - B cloudy
 - C Sun
 - D water
- 26 The land and the water warm the _____.
- A air
 - B cloudy
 - C Sun
 - D water
- 27 You cannot see the Sun on a _____ day.
- A air
 - B cloudy
 - C Sun
 - D water
- 28 What warms Earth's land, air, and water?
- A the Moon
 - B the Sun
 - C the soil
 - D the wind
- 29 Which one does not tell about the Sun?
- A Light from the Sun warms the land.
 - B Light from the Sun warms the water.
 - C Light from the Sun warms the air.
 - D Light from the Sun feels cool on your skin.

- 30 What is a season?
- A a time of day
 - B a place on Earth
 - C a time of year
 - D a day of the week
- 31 What weather do many places have in spring?
- A cold and dry
 - B warm and rainy
 - C cold and rainy
 - D warm and dry
- 32 How many seasons happen each year?
- A one
 - B two
 - C three
 - D four
- 33 What is the right order of the seasons?
- A summer, winter, fall, spring
 - B spring, summer, fall, winter
 - C fall, summer, winter, spring
 - D winter, fall, spring, summer

34 During which season do temperatures begin to get warmer?

- A summer
- B spring
- C winter
- D fall

35 Which changes in weather can you predict the best?

- A weather changes from season to season
- B weather changes from week to week
- C weather changes from day to day
- D weather changes from month to month

36 A _____ is a time of year.

- A daylight
- B four
- C season
- D spring

37 There are _____ seasons.

- A daylight
- B four
- C season
- D spring



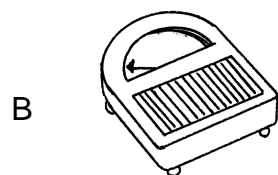
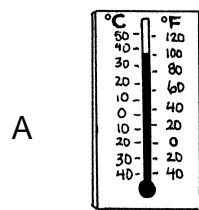
38 Temperatures get warmer in _____.

- A winter
- B four
- C season
- D spring

39 Spring has more _____ hours than winter.

- A daylight
- B four
- C season
- D spring

40 Which shows what the temperature in summer might be?



41 When does summer happen?

- A after fall
- B before winter
- C after spring
- D before spring

42 How is summer different from winter?

- A Summer is longer.
- B Summer is warmer.
- C Summer is shorter.
- D Summer is colder.

43 Which one tells about summer?

- A It is the warmest season.
- B It is the wettest season.
- C It is the coldest season.
- D It is the shortest season.

44 There are four _____.

- A rain
- B seasons
- C summer
- D warmest

45 The season that comes after spring is _____.

- A rain
- B seasons
- C summer
- D winter

46 Summer is the _____ season.

- A rain
- B seasons
- C summer
- D warmest

- 47 Some places get little _____ in summer.
- A rain
 - B seasons
 - C summer
 - D warmest
- 48 What happens in fall?
- A The weather gets warmer.
 - B The days get longer.
 - C Most flowers bloom.
 - D Some trees turn colors.
- 49 In which season do the leaves on some trees turn colors?
- A winter
 - B summer
 - C fall
 - D spring
- 50 The season that comes after summer is _____.
- A warmest
 - B daylight
 - C trees
 - D fall
- 51 Fall is _____ than summer.
- A cooler
 - B daylight
 - C trees
 - D fall

52 Fall has less _____ than summer.

- A cooler
- B daylight
- C trees
- D fall

53 Some _____ change color in fall.

- A cooler
- B daylight
- C trees
- D fall

54 When does most snow fall?

- A spring
- B summer
- C winter
- D fall

55 What clothes would you wear mostly in winter?



56 In which order do the seasons happen?

- A summer, winter, spring, fall
- B winter, spring, fall, summer
- C spring, summer, fall, winter
- D fall, summer, winter, spring

57 Which season is coldest?

- A fall
- B winter
- C summer
- D spring

58 The season that comes after fall is _____.

- A spring
- B snow
- C wettest
- D winter

59 Winter is the _____ season.

- A coldest
- B snow
- C daylight
- D winter

60 In some places, winter is the _____ season.

- A daylight
- B warm
- C wettest
- D winter

61 Some places get _____ in winter.

- A summer
- B snow
- C seasons
- D warmest